
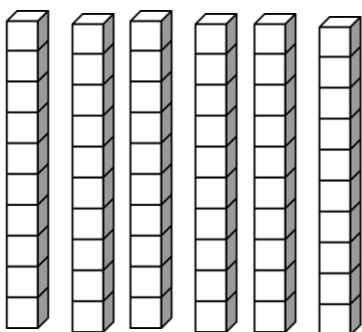

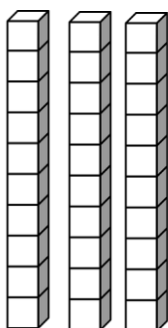

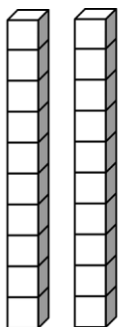

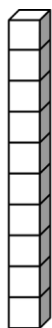
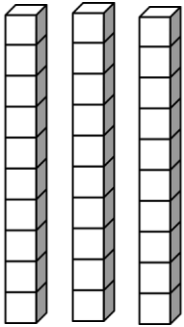

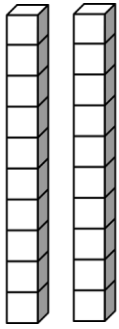


Estudante: _____ Data: __/__/_____

Atividade de Matemática

1- Escreva a quantidade correspondente ao material dourado e depois escreva o nome do número.





2- Some todo material dourado da atividade anterior e registre o número e o nome do número abaixo.